




Position


6								
5								
4								
3			 Goat					
2								
1								
	A	B	C	D	E	F	G	H

Draw these animals on the grid.


1. 
Badger, A3

2. 
Duck, C6


3. 
Cow, H6

4. 
Horse, E1

5. 
Otter, D5

6. 
Chicken, H1

7. 
Sheep, G4

8. 
Hedgehog, F2

Which animal is:

9. nearest to the goat?

10. furthest away from the goat?

11. in the same row as the goat?



I can follow instructions to place items in a grid

