
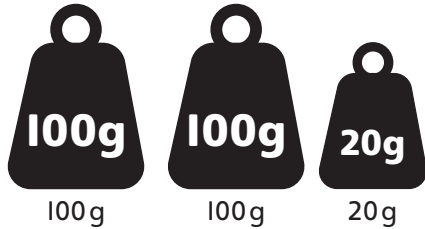


Heavy stuff



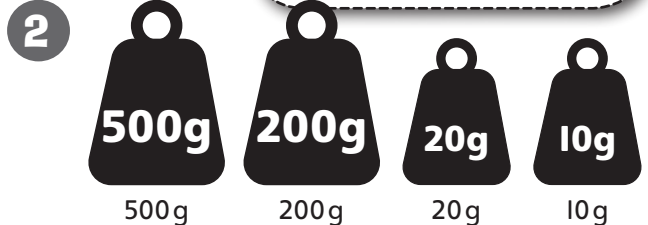
How much does each pile of weights weigh altogether?

The first one has been done for you.




100g 100g 20g

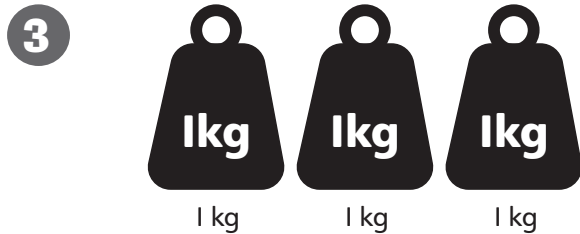
220 g



500g 200g 20g 10g



500g 50g 10g



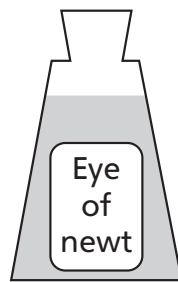
1 kg 1 kg 1 kg

4 Count in steps of 100 g up to 1 kg.

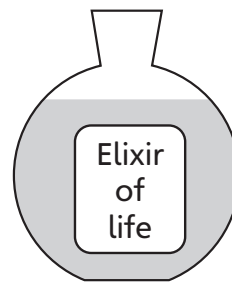
100 g	200 g	<input type="text"/>	<input type="text"/>	<input type="text"/>	600 g
<input type="text"/>	<input type="text"/>	<input type="text"/>	<input type="text"/>	<input type="text"/>	<input type="text"/>

Wizard workout

5 Write the capacities of these wizard potions in order from smallest to largest.



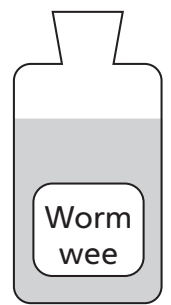
250 ml



1 L



3 L



500 ml

<input type="text"/>	<input type="text"/>	<input type="text"/>	<input type="text"/>
----------------------	----------------------	----------------------	----------------------

Puzzling pictures

- 6 Draw a picture of:
- an animal heavier than you,
 - something lighter than an apple.

I found this:



Easy



Challenging



I needed help