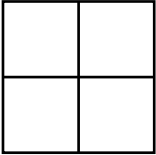


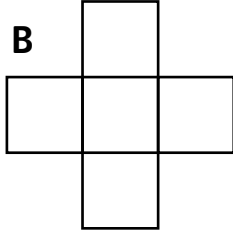
Perimeter and area

Write the perimeter and area of each shape.

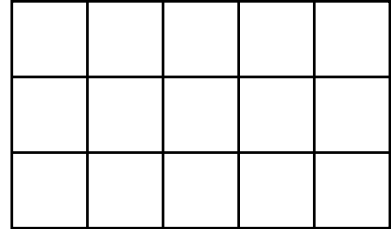
A



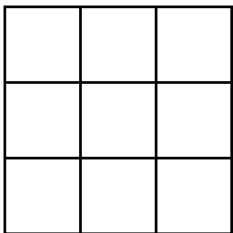
B



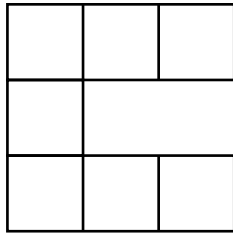
C



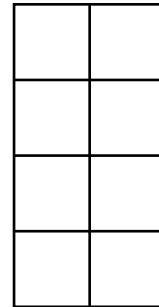
D



E



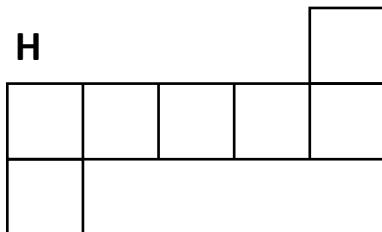
F



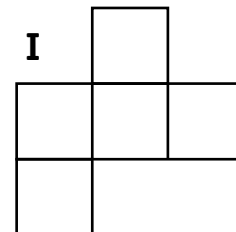
G



H



I



Shape	A	B	C	D	E	F	G	H	I
Perimeter in cm	8								
Area in square cm	4								



I can explain the difference between area and perimeter

